

GEORGIA INSTITUTE OF TECHNOLOGY
SCHOOL of ELECTRICAL & COMPUTER ENGINEERING
QUIZ #2

DATE: 17-Mar-06

COURSE: ECE-2025

NAME: _____
 LAST, FIRST

GT #: _____
(ex: gtz123q)

3 points

3 points

3 points

Recitation Section: Circle the date & time when your **Recitation Section** meets (not Lab):

L05:Tues-Noon (Juang)

L06:Thur-Noon (Verriest)

L07:Tues-1:30pm (Juang)

L01:M-3pm (McClellan)

L09:Tues-3pm (Chang)

L02:W-3pm (Zhou)

L10:Thur-3pm (Taylor)

L03:M-4:30pm (Fekri)

L11:Tues-4:30pm (Chang)

L04:W-4:30pm (Zhou)

-
- Write your name on the front page **ONLY**. **DO NOT** unstaple the test.
 - Closed book, but a calculator is permitted.
 - One page (8½" × 11") of **HAND-WRITTEN** notes permitted. OK to write on both sides.
 - **JUSTIFY** your reasoning clearly to receive partial credit. Explanations are also required to receive **FULL** credit for any answer.
 - You must write your answer in the space provided on the exam paper itself. Only these answers will be graded. Circle your answers, or write them in the boxes provided. If space is needed for scratch work, use the backs of previous pages.

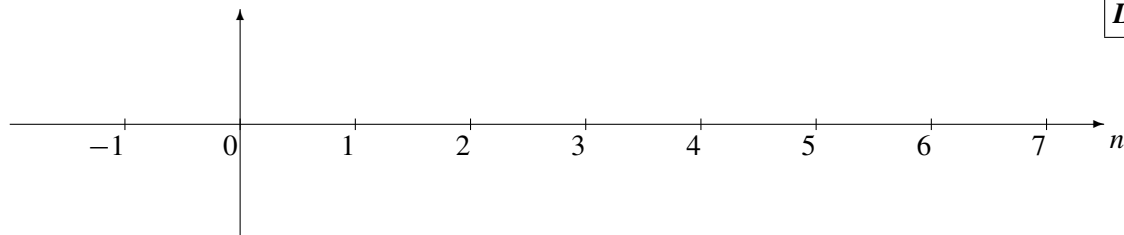
<i>Problem</i>	<i>Value</i>	<i>Score</i>
1	20	
2	20	
3	20	
4	20	
5	20	
No/Wrong Rec	-3	

PROBLEM Spring-06-Q.2.1:

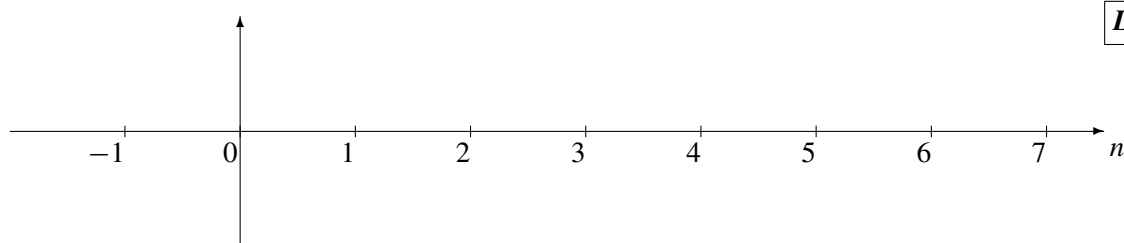
(a) Evaluate the convolution: $\mathbf{y_n} = \mathbf{conv}([10\ 10\ 10\ 10\ 10], [6\ -3\ -2])$;

Note: a MATLAB vector implicitly defines a signal to have its starting point at $n = 0$.

Give your answer as a *stem plot*.



(b) Make a *stem plot* of the signal $s[n] = 7(u[n - 3] - u[n - 6])$.

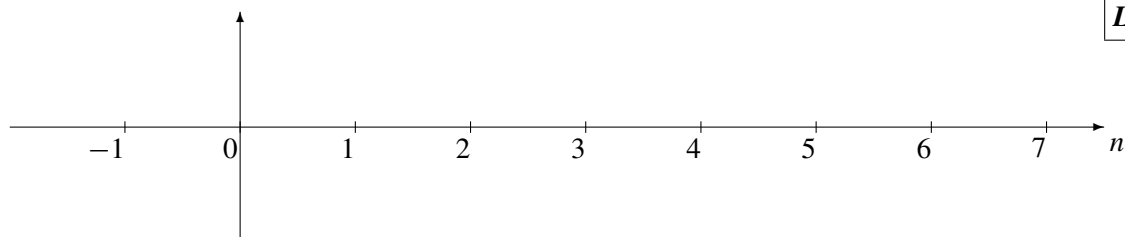


PROBLEM Spring-06-Q.2.2:

(a) Determine the impulse response of the system:

$$y[n] = 88x[n - 3] + 88x[n - 6]$$

Give your answer as a *stem plot*.



(b) Determine the frequency response of the FIR system:

$$y[n] = 88x[n - 3] + 88x[n - 6]$$

Give your answer as a formula **in the following form:** $H(e^{j\hat{\omega}}) = e^{-j\beta\hat{\omega}} A \cos(\mu\hat{\omega})$
by finding numerical values for A , β and μ .

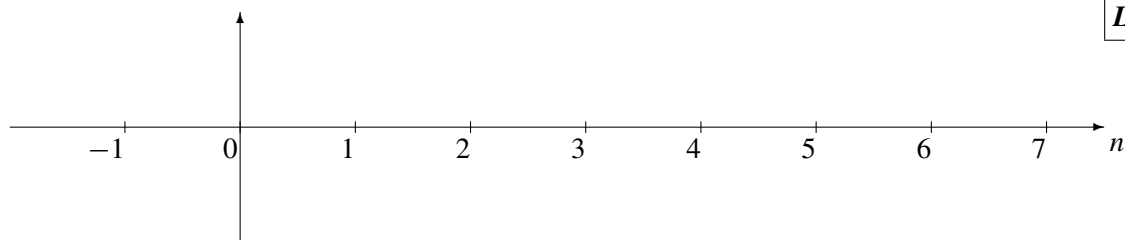
$A =$	$\beta =$	$\mu =$
-------	-----------	---------

PROBLEM Spring-06-Q.2.3:

Suppose that the system function of an FIR filter is

$$H(z) = 70z^{-4} (1 - e^{j5\pi/6}z^{-1}) (1 - e^{-j5\pi/6}z^{-1})$$

- (a) Determine the impulse response, $h[n]$, of the FIR filter. Give your answer as a *stem plot*.



Label all points

- (b) Evaluate the magnitude and phase of the frequency response of the FIR filter at $\hat{\omega} = \pi/6$.

Magnitude =

Phase =

PROBLEM Spring-06-Q.2.4:

Here are some operations that are often done in MATLAB. In each case, you should analyze the code and determine the answer via mathematics.

- (a) Suppose that a student enters the following MATLAB code:

```
nn = 0:4480099;  
zz = (2 - j*5) * exp(j*(1.9*pi*nn + 3.33));  
soundsc( real(zz), 500 )
```

Determine the analog frequency (in Hertz) that will be heard. (There might be folding or aliasing!)

FREQ = Hz

Explain your reasoning.

- (b) Suppose that a student writes the following MATLAB code to generate a sine wave:

```
tt = 0:1/72000:10000;  
xx = cos( 2*pi*9000*tt + pi/3 );  
soundsc( xx, fsamp );
```

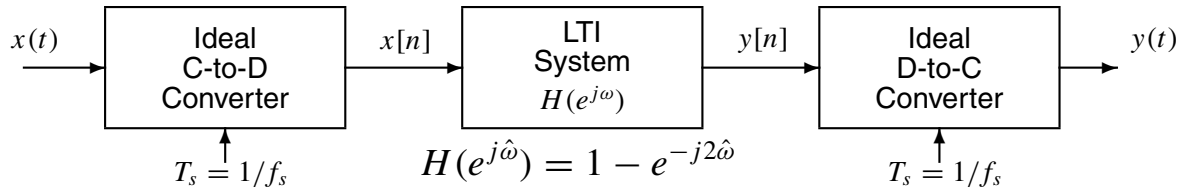
Although the sinusoid was not written to have a frequency of 1100 Hz, it is possible to play out the vector `xx` so that it sounds like a 1100 Hz tone. Determine the value of `fsamp` that should be used to play the vector `xx` as a 1100 Hz tone.

fsamp = Hz

Explain your reasoning.

PROBLEM Spring-06-Q.2.5:

Consider the following system for discrete-time filtering of a continuous-time signal:

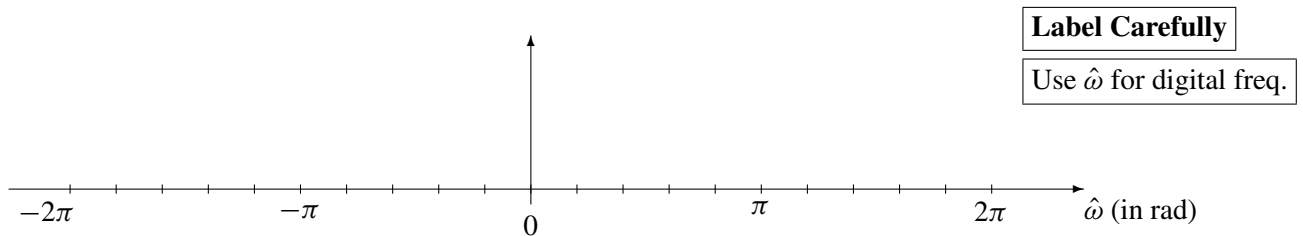


For all parts below, the input to the ideal C-to-D converter is $x(t) = 60 \cos(2000\pi t)$.

- (a) Determine the Nyquist rate (in hertz) for sampling the input signal $x(t)$. Explain.

$f_{\text{Nyquist}} =$ Hz

- (b) If the sampling rate of the C-to-D converter is $f_s = 3000$ samples/sec, make a plot of the spectrum of the discrete-time signal $x[n]$ over the range of frequencies $-2\pi \leq \hat{\omega} \leq 2\pi$. Make sure to show **all spectrum lines** and label the frequency, amplitude and phase of each spectral component.



- (c) If the sampling rate of the the ideal D-to-C converter is $f_s = 3000$ samples/sec, draw the spectrum for the continuous-time output signal, $y(t)$. Use $x(t)$ defined above.

